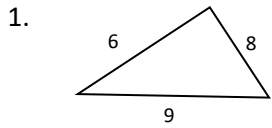


Name:

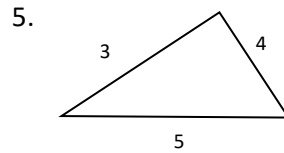
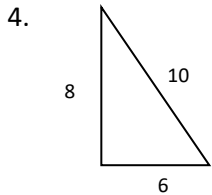
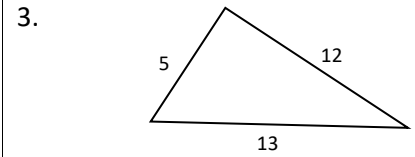
Date:

Period:

Do the following lengths form a right triangle? Answer yes or no and justify your answer. Show all your work on a separate piece of paper.



2. $a = 6.4, b = 12, c = 12.2$



6. $a = 2.1, b = 7.2, c = 7.5$

Find each missing length to the nearest tenth. Show all your work on a separate piece of paper.

