

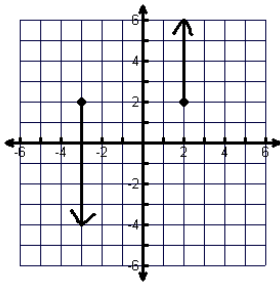
Name: \_\_\_\_\_

Date: \_\_\_\_\_

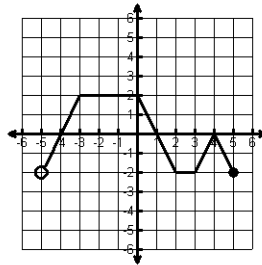
Period: \_\_\_\_\_

State the domain and range for each graph and then tell if the graph is a function (write yes or no). Use interval notation when necessary.

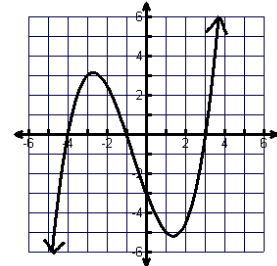
1) Domain \_\_\_\_\_  
Range \_\_\_\_\_  
Function? \_\_\_\_\_



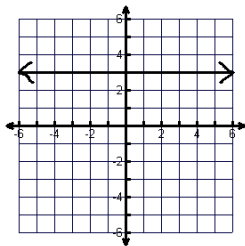
2) Domain \_\_\_\_\_  
Range \_\_\_\_\_  
Function? \_\_\_\_\_



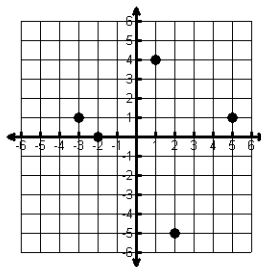
3) Domain \_\_\_\_\_  
Range \_\_\_\_\_  
Function? \_\_\_\_\_



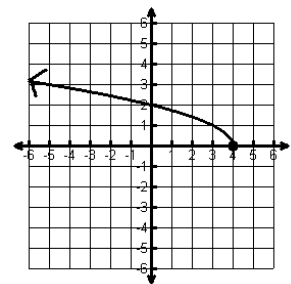
4) Domain \_\_\_\_\_  
Range \_\_\_\_\_  
Function? \_\_\_\_\_



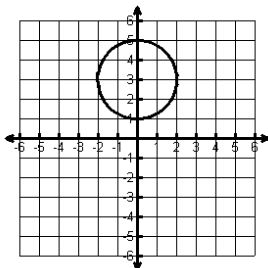
5) Domain \_\_\_\_\_  
Range \_\_\_\_\_  
Function? \_\_\_\_\_



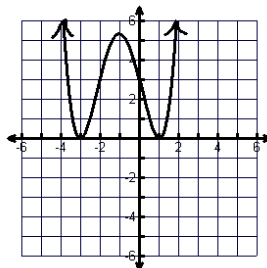
6) Domain \_\_\_\_\_  
Range \_\_\_\_\_  
Function? \_\_\_\_\_



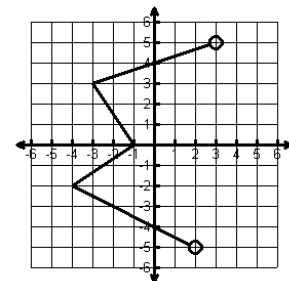
7) Domain \_\_\_\_\_  
Range \_\_\_\_\_  
Function? \_\_\_\_\_



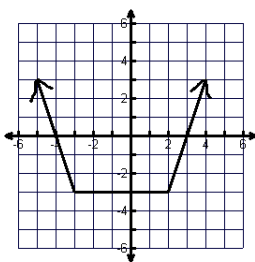
8) Domain \_\_\_\_\_  
Range \_\_\_\_\_  
Function? \_\_\_\_\_



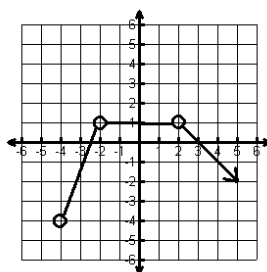
9) Domain \_\_\_\_\_  
Range \_\_\_\_\_  
Function? \_\_\_\_\_



10) Domain \_\_\_\_\_  
Range \_\_\_\_\_  
Function? \_\_\_\_\_



11) Domain \_\_\_\_\_  
Range \_\_\_\_\_  
Function? \_\_\_\_\_



12) Domain \_\_\_\_\_  
Range \_\_\_\_\_  
Function? \_\_\_\_\_

